

BASIC WORKSHEET

Name: _____

Grade: III

Branch: _____

Date: 30/04/20

Subject: Science

TOPIC: Living and Non living things



Q.1. What are living and non living things?

A. _____

Q.2. Give two examples of natural and man made things.

A. _____

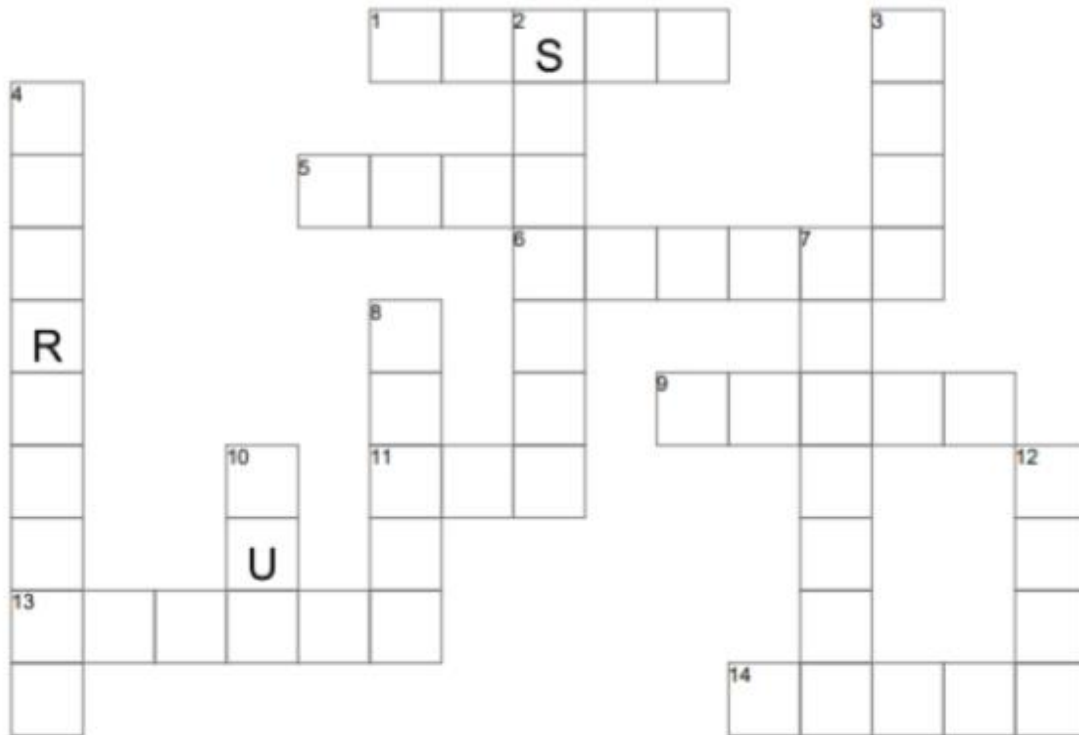
Q.3. Colour living things green and non living things in red:



Q.4. Non living things found in nature are called _____ things.

Q.5.

1. Using the Across and Down clues, write the correct words in the numbered grid below.



ACROSS

1. Living things make this.
5. Living and some non living things can do this.
6. Things are non living or...
9. We drink this and all animals and plants need it.
11. All animals and plants need this. We breathe it.
13. Living things grow and.....
14. This is an example of a non living moving thing.

DOWN


2. We live here and all animals need this too.
3. This is an example of a living thing.
4. Living things do this but non living things do not.
7. Some non living things are man made, some are...
8. Plants don't need shelter but they need this.
10. Plants need the light from the _____ to grow.
12. Plants and animals need this, we eat it.

Q.6. Give examples :

NATURAL THINGS	MAN MADE THINGS

Q.7. Identify the following pictures and answer the following questions:

a. Can I move by myself ? _____ Do I die? _____



Can I reproduce ? _____ Do I grow ? _____

b. Can I move by myself ? _____ Do I die? _____



Can I reproduce ? _____ Do I grow ? _____