

Name of the student: \_\_\_\_\_

Grade-2

Date: 30/04/2020

**I. Fill in the blanks.**

a)  $7-7=$  \_\_\_\_\_

b)  $18-0=$  \_\_\_\_\_

c)  $72+2=$  \_\_\_\_\_

d)  $99-99=$  \_\_\_\_\_

e)  $110+0=$  \_\_\_\_\_

f)  $26-1=$  \_\_\_\_\_

**II. Solve the following.**

a) 
$$\begin{array}{r} 2 \quad 2 \\ + \quad 6 \\ \hline \\ \hline \end{array}$$

d) 
$$\begin{array}{r} 9 \quad 7 \\ - \quad 4 \\ \hline \\ \hline \end{array}$$

g) 
$$\begin{array}{r} 4 \quad 6 \\ - 4 \quad 0 \\ \hline \\ \hline \end{array}$$

b) 
$$\begin{array}{r} 2 \quad 5 \\ +3 \quad 4 \\ \hline \\ \hline \end{array}$$

e) 
$$\begin{array}{r} 6 \quad 8 \\ - 5 \quad 8 \\ \hline \\ \hline \end{array}$$

h) 
$$\begin{array}{r} 3 \quad 4 \quad 4 \\ + 1 \quad 3 \quad 2 \\ \hline \\ \hline \end{array}$$

c) 
$$\begin{array}{r} 9 \quad 4 \\ - 3 \quad 0 \\ \hline \\ \hline \end{array}$$

f) 
$$\begin{array}{r} 4 \quad 1 \\ + 2 \quad 2 \\ \hline \\ \hline \end{array}$$

i) 
$$\begin{array}{r} 2 \quad 5 \quad 9 \\ - 1 \quad 0 \quad 0 \\ \hline \\ \hline \end{array}$$

**III. Put '+' or '-' sign in the circle.**

a) 25  14=39

b) 85  5=80

c) 34  4=30

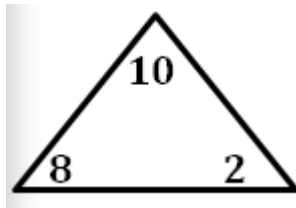
d) 26  12=38

e) 47  33=14

f) 55  10=65

**IV. Complete the following facts.**

a)



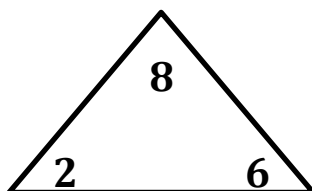
8 +  2 =  10

2 +  8 =  10

10 -  8 =  2

10 -  2 =  8

b)



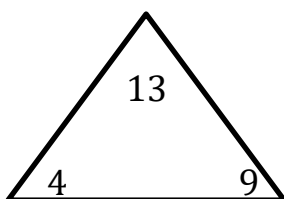
+  =

+  =

-  =

-  =

c)



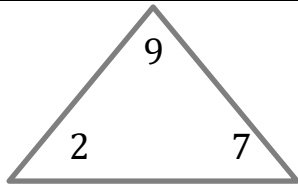
+  =

+  =

-  =

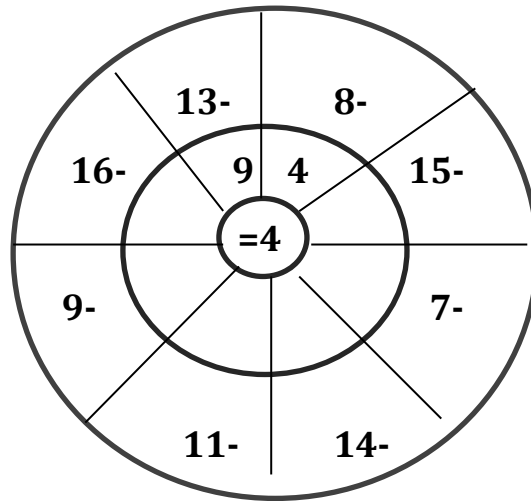
-  =

d)



$$\begin{array}{l} \square + \square = \square \\ \square + \square = \square \\ \square - \square = \square \\ \square - \square = \square \end{array}$$

**IV. Solve the following**



\*\*\*\*\*