

Name: _____

Grade: III

Branch: _____

Date: 29/04/20

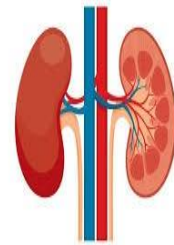
Subject: Science

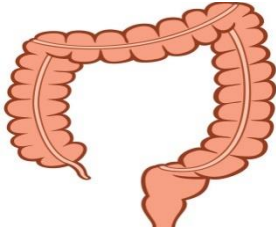
TOPIC: OUR BODY

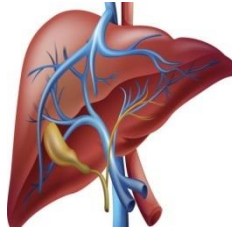
1. Name the following Internal Organs:



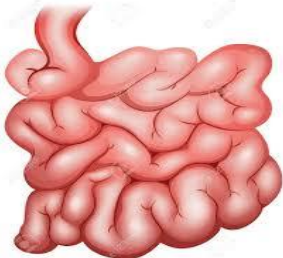




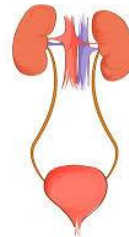












2. Correct the following sentences:

- Saliva is found in the stomach.
- Air goes from the food pipe to the lungs.
- Liver produces urine.

3. For each of the organ system below, identify its parts refers to.

Organ System	Parts
Respiratory system	
Circulatory system	
Digestive system	
Skeletal system	
Excretory system	

4. Name some bones in Out Skeletal System:



5. The _____ system helps us in movement.

6. Give one word for the following:

- I give instructions to all parts of your body _____
- I am an organ system that helps to clean your body _____
- We are the smallest unit of a living being _____

7. (i). Make a model of any 3 Internal organs of your choice with the help of clay / Plaster of Paris / dough.

Internal organ	Function
Heart	
Kidneys	
Small intestine	

(ii). Complete the following terminology:

Study of:

- a. Heart _____
- b. Skin _____
- c. Teeth _____
- d. Eyes _____

8. What is the weight of human brain? _____

9. How many teeth do adults have? _____

10. What is the largest internal organ (by mass) in human body?

11. How much % of our blood makes up our body weight?

12. How much saliva does our mouth produces each day?

13. Total no. of bones in our body _____