

Answer Key EVS

Grade: 2

Date: 29/04/2020

I. Identify the class room objects and fill in the blanks.



A.- School bag




B.- Pencil



C.- scissor



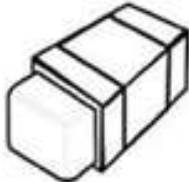
D.- books



E. ruler



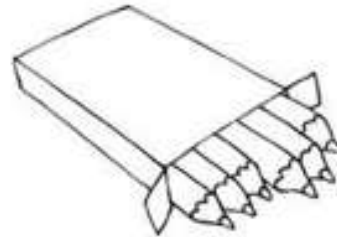
F.- chair



G.- eraser



H. white board



I: crayons



J.- sharpener




K. pen



L.- glue

II. Observe the pictures and list the class room instructions.

Raise your hand	Be quiet	Write your name	Sit down	Close your book
Clap your hands	stand up	come here	open your book	clean the board



1. Clean the board
2. Raise your hand
3. Open your book
4. Close your book
5. Come here
6. Be quiet
7. Write your name
8. Stand up
9. Clap your hands
10. Sit down

III. Choose the correct answer.

1. How many hours are there in a day?

(b)

- a. 48 hours
- b. 24 hours
- c. 72 hours
- d. 12 hours



2. What is the sequence of colours in a rainbow?

(b)



- a. OYRGVBI (Orange, Yellow, Red, Green, Violet, Blue & Indigo)
- b. ROYGBIV (Red, Orange, Yellow, Green, Blue, Indigo & Violet)
- c. OYBIGVR (Orange, Yellow, Blue, Indigo, Green, Violet & Red)
- d. GVBYORI (Green, Violet, Blue, Yellow, Orange, Red & Indigo)

3 Which place in India is also known as “Heaven on Earth”?

(a)

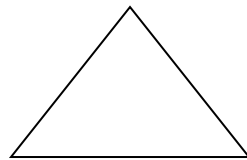
- a. Kashmir
- b. Kerala
- c. Tamil Nadu
- d. Assam



4. What do you call a shape which has three sides?

(c)

- a. Square
- b. Rectangle
- c. Triangle
- d. Pentagon



5 Which is the fastest land animal on earth?

(a)

- a. Cheetah
- b. Deer
- c. Lion
- d. Giraffe

