

Subject: EVS

Name of the Student: _____ Grade: 2 Date: 29/04/2020

I. Identify the class room objects and fill in the blanks.

Pencil scissor ruler chair glue books white board
School bag eraser crayons sharpener pen



A.- _____




B.- _____



C.- _____



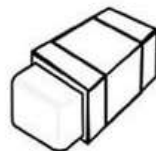
D.- _____



E.- _____



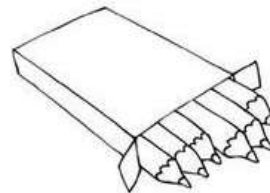
F.- _____



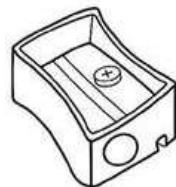
G.- _____



H.- _____



I.- _____



J.- _____




K.- _____



L.- _____

II. Observe the pictures and list the class room instructions.

Raise your hand	Be quiet	Write your name	Sit down	Close your book
Clap your hands	stand up	come here	open your book	clean the board



1.
2.
3.
4.
5.
6.
7.
8.
9.
10.

III. Choose the correct answer.

1. How many hours are there in a day? ()

- a. 48 hours
- b. 24 hours
- c. 72 hours
- d. 12 hours



2. What is the sequence of colours in a rainbow? ()



- a. OYRGVBI (Orange, Yellow, Red, Green, Violet, Blue & Indigo)
- b. ROYGBIV (Red, Orange, Yellow, Green, Blue, Indigo & Violet)
- c. OYBIGVR (Orange, Yellow, Blue, Indigo, Green, Violet & Red)
- d. GVBYORI (Green, Violet, Blue, Yellow, Orange, Red & Indigo)

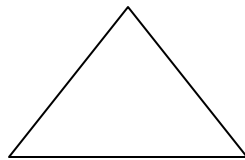
3 Which place in India is also known as “Heaven on Earth”? ()

- a. Kashmir
- b. Kerala
- c. Tamil Nadu
- d. Assam



4. What do you call a shape which has three sides? ()

- a. Square
- b. Rectangle
- c. Triangle
- d. Pentagon



5 Which is the fastest land animal on earth? ()

- a. Cheetah
- b. Deer
- c. Lion
- d. Giraffe

