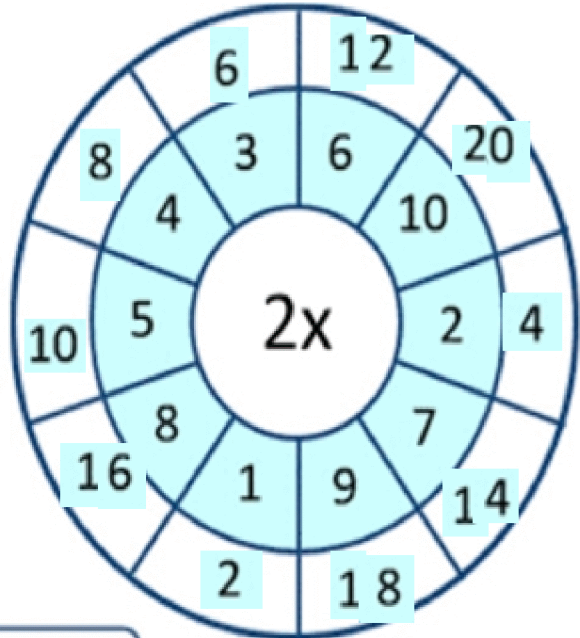
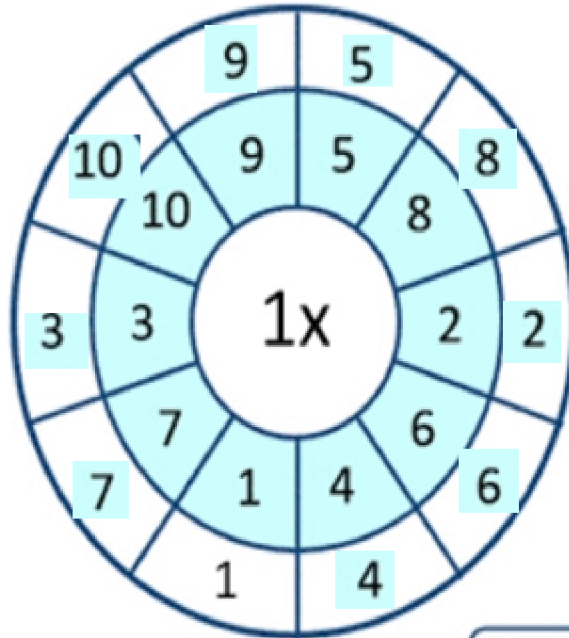
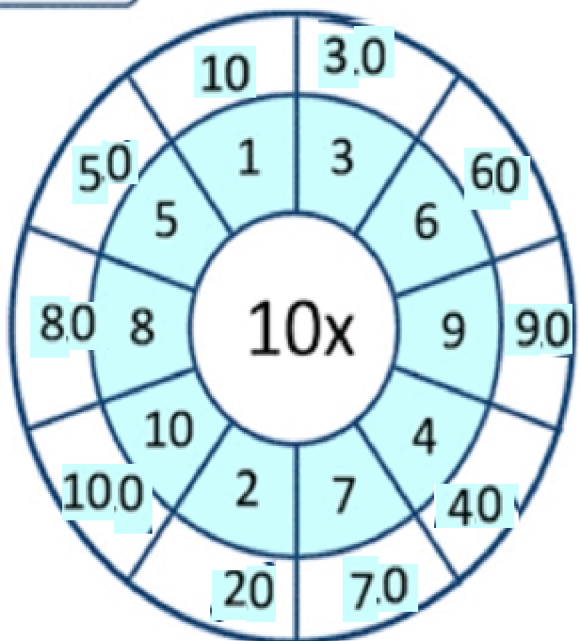
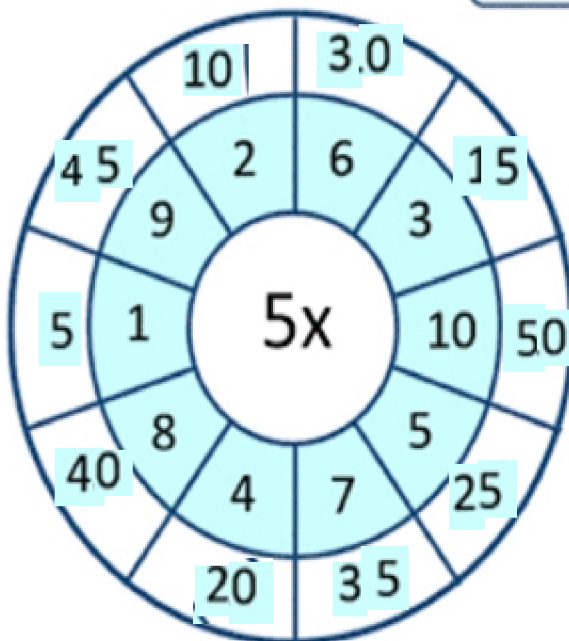


I. Complete the multiplication wheel.



UP TO X10



II. Match the following.

1. Symbol of multiplication $3 + 3$
2. 2×3 multiplication
3. Result of multiplication \times
4. 5 times 10 5×3
5. Repeated addition product
6. $3 + 3 + 3 + 3 + 3$ 50
7. 1×5 40
8. 8×5 5

IV. Write numbers from 201 to 300.

201	211	221	231	241	251	261	271	281	291
202	212	222	232	242	252	262	272	282	292
203	213	223	233	243	253	263	273	283	293
204	214	224	234	244	254	264	274	284	294
205	215	225	235	245	255	265	275	285	295
206	216	226	236	246	256	266	276	286	296
207	217	227	237	247	257	267	277	287	297
208	218	228	238	248	258	268	278	288	298
209	219	229	239	249	259	269	279	289	299
210	220	230	240	250	260	270	280	290	300