









Name: _____ Grade: III Branch: _____ Date: 27/04/20

Subject: Science

TOPIC: STATES OF MATTER

1. Complete the following table:

STATE	ADD	NEW STATE	EXAMPLE
 SOLID	+  =		
 LIQUID	+  =		
 GAS	+  =		
 LIQUID	+  =		

2. Which arrow shows melting?



3. Observe the following pictures and write their states of matter:



Milk is _____



The balloons are full of _____



The pencils are _____



This is the solid form of water. What it is called as? _____

4. A man is oiling the machine. Which state of matter is oil?



5. Ice _____ to form water.

6. Circle the correct answer:

(a) .Particles are closely packed in this.

Solid

liquid

Gas

(b). This can flow.

Solid

liquid

Gas

7. The states of matter are _____ (interchangeable / intrachangeable).

8. Name the processes that change the state of matter from one form to another:

