

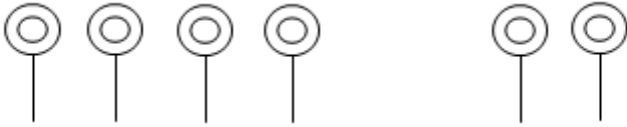
Name of the student: _____

Grade-II

Date: _____

I. Fill in the blanks

a.



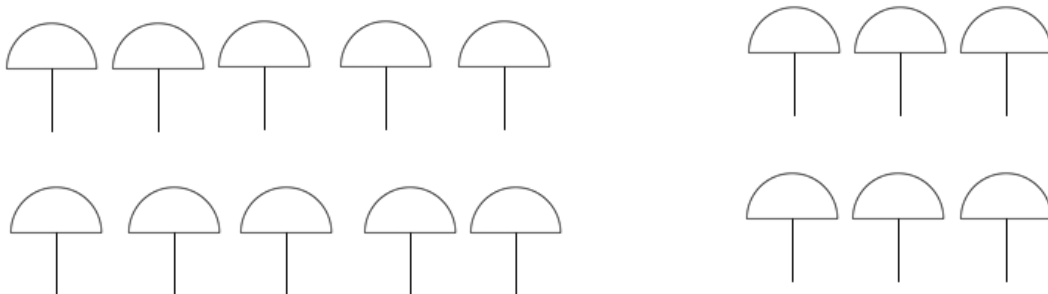
$$\square + \square = \square$$

b.




$$\square + \square = \square$$

c.



$$\square + \square = \square$$

d.



$$\boxed{} + \boxed{} = \boxed{}$$

e.



$$\boxed{} + \boxed{} = \boxed{}$$

II. Add by counting forward .

a. $13+4=$

Start from ⑬ and move forward ⑭ ⑮ ⑯ ⑰

b. $21+2=$

Start from ○ and move forward ○ ○

c. $39+5=$

Start from ○ and move forward ○ ○ ○ ○ ○

d. $50+6=$

Start from ○ and move forward ○ ○ ○ ○ ○ ○

e. $100+4=$

Start from ○ and move forward ○ ○ ○ ○

III. Add the following.

a. $6+3 =$

b. $5+3 =$

c. $7+2 =$

d. $6+4 =$

e. $0+9 =$

f. $1+8 =$

g. $12+6 =$

h. $17+2 =$

i. $13+6 =$

j. $15+3 =$

k. $11+3 =$

l. $10+6 =$

m. $18+1 =$

n. $5+7 =$

o. $6+6 =$

p. $16+1 =$

q. $12+4 =$

r. $15+4 =$

S. $12+7 =$

t. $10+5 =$

IV. Fill in the blanks .

a. $8 +$ $= 9$

b. $1 +$ $= 6$

c. $2 +$ $= 4$

d. $+ 1 = 10$

e. $+ 3 = 8$

f. $4 +$ $= 9$

g. $6 + 2 =$

h. $5 = 7$

i. $5 +$

V .PUZZLE

Complete the puzzle by using hints .

