












Name: _____ Grade: IV Branch: _____ Date: 24/04/20

Subject: Social Key

Topic : Political Divisions of India

Answer the following questions:

	I	II	III	IV
A				
B				
C				

By using the images as hints, identify the Political division of India, of the person/ place/ object and fill in the blanks with the respective state and capital city: (first one done for you)

	State	Capital		State	Capital
A-I	Hint : Telangana	Hyderabad	A-III	Orissa	Bhuvaneshwar
B-I	Andaman and Nicobar	Port Blair	B-III	Tamil nadu	Chennai
C-I	Gujarat	Gandhinagar	C-III	West Bengal	Kolkata
A-II	Rajasthan	Jaipur	A-IV	Manipur	Imphal
B-II	Uttar Pradesh	Lucknow	B-IV	Karnataka	Bengaluru
C-II	Delhi	Delhi	C-IV	Kerala	Thiruvananthapuram

