













Name: \_\_\_\_\_ Grade: IV Branch: \_\_\_\_\_ Date: 24/04/20

## Subject: Social

### Topic : Political Divisions of India

Answer the following questions:

	I	II	III	IV
A				
B				
C				

By using the images as hints, identify the Political division of India, of the person/ place/ object and fill in the blanks with the respective state and capital city: (first one done for you)

	State	Capital		State	Capital
A-I	Hint : Telangana	Hyderabad	A-III		
B-I			B-III		
C-I			C-III		
A-II			A-IV		
B-II			B-IV		
C-II			C-IV		

