

Grade: 2

Date:24/04/2020

I. Write the number names of the following.

- a) 100=**One hundred**
- b) 349=**Three hundred and Forty nine**
- c) 560=**Five hundred and sixty**
- d) 228=**Two hundred and twenty eight**
- e) 724=**Seven hundred and twenty four**

II. What is the digit in the hundreds place in each number.

- a).

3	2	7
---	---	---

3

 b).

7	2	1
---	---	---

7

- c).

6	3	5
---	---	---

6

 d).

5	1	0
---	---	---

5

- e).

7	2	4
---	---	---

7

 f).

9	1	6
---	---	---

9

III. Compare the numbers by using $<$, $>$, $=$.

- a) 3 Tens+7ones $>$ 4 ones
- b) 5 Tens = 50 ones
- c) 6 ones+2 Tens $<$ 2 Tens+8 ones
- d) 8Tens+8ones $<$ 1 Hundred

IV. Fill the blanks with number of hundreds and Tens and Ones.

- a) 571= **5 Hundreds+7 Tens+ 1 Ones**
- b) 323= **3Hundreds+ 2Tens+3 Ones**
- c) 448= **4Hundreds+4 Tens+8Ones**
- d) 650= **6Hundreds+5Tens+0 Ones**
- e) 905= **9Hundreds+0 Tens+ 5Ones**
- f) 272= **2Hundreds+7Tens+2One**

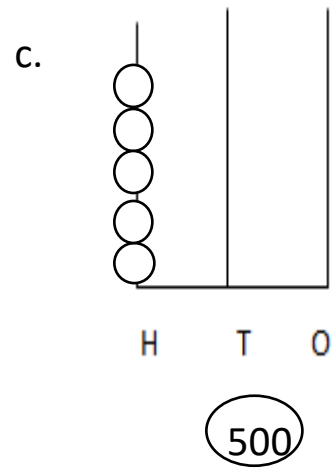
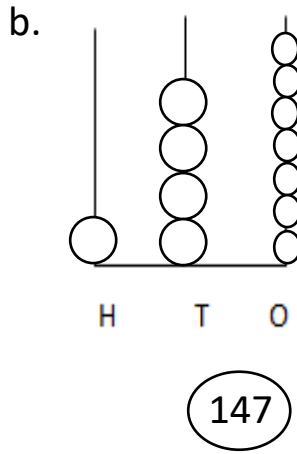
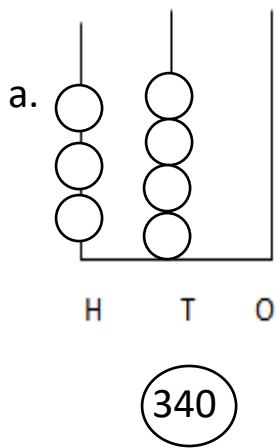
V. Fill the circles by counting back word

551	550	549	548	547	546	545	544
700	699	698	697	696	695	694	693
229	228	227	226	225	224	223	222
460	459	458	457	456	455	454	453
167	166	165	164	163	162	161	160
350	349	348	347	346	345	344	343

VI. Write the numbers from 810 to 850

811	821	831	841
812	822	832	842
813	823	833	843
814	824	834	844
815	825	835	845
816	826	836	846
817	827	837	847
818	828	838	848
819	829	839	849
820	830	840	850

VII. Draw the beads on the Abacus.



VII. What comes before and after the numbers .

- a. 399 400 401
- b. 394 395 396
- c. 643 644 645
- d. 228 229 230

VIII. Solve and write each of them in words as directed.

