

Name of the student: _____

Grade-II

Date: _____

I. Write the number names of the following.

a) 100= _____

b) 349= _____

c) 560= _____

d) 228= _____

e) 724= _____

II. What is the digit in the hundreds place in each number.

a).

327	
-----	--

 b).

721	
-----	--

c).

635	
-----	--

 d).

510	
-----	--

e).

724	
-----	--

 f).

916	
-----	--

III. Compare the numbers by using $<$, $>$, $=$.

a) 3 Tens+7ones _____ 4 ones

b) 5 Tens _____ 50 ones

c) 6 ones+2 Tens _____ 2 Tens+8 ones

d) 8Tens+8ones _____ 1 Hundred

IV. Fill the blanks with number of hundreds and Tens and Ones.

a) 571= _____ Hundreds+ _____ Tens+ _____ Ones

b) 323= _____ Hundreds+ _____ Tens+ _____ Ones

c) 448= _____ Hundreds+ _____ Tens+ _____ Ones

d) 650= _____ Hundreds+ _____ Tens+ _____ Ones

e) 905= _____ Hundreds+ _____ Tens+ _____ Ones

f) 272= _____ Hundreds+ _____ Tens+ _____ One

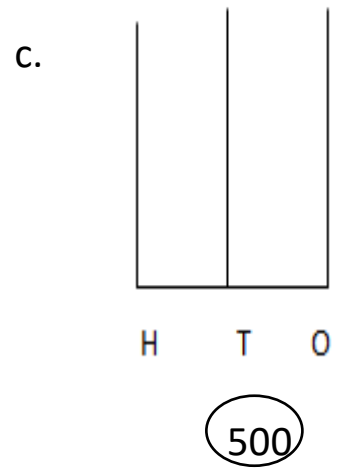
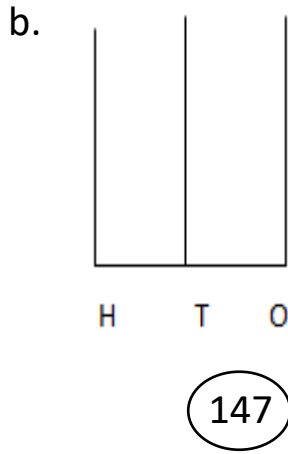
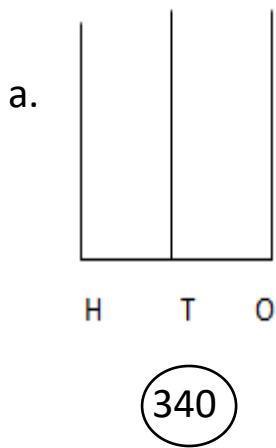
V. Fill the circles by counting back word

551			548				
700				696			
229		227					
460					455		
167						161	
350							343

VI. Write the numbers from 810 to 850

810			
			850

VII. Draw the beads on the Abacus.



VII. What comes before and after the numbers .

a. ___ 400 ___

b. ___ 395 ___

c. ___ 644 ___

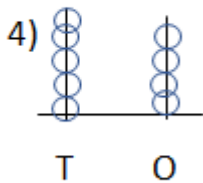
d. ___ 229 ___

VIII. Solve and write each of them in words as directed.

1) Greatest 2- digit number.

2) It has 5 tens.

3) 8 tens and 2 ones.



5) $70+5$.

