

Name: _____ Grade : V Branch: _____ Date:23/04/2020 Sub: Math

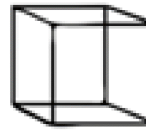
I
3-D Shapes.



Cone



cylinder

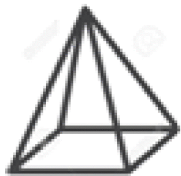


cube

Faces : _____

Edges: _____

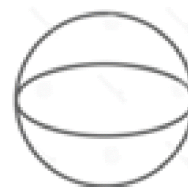
Vertices : _____



Pyramid



Rectangular prism



Sphere

Faces : _____

Edges: _____

Vertices: _____

II. Name the angles given below.

