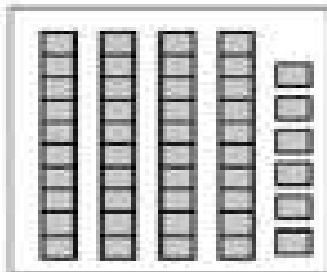


Name of the student: \_\_\_\_\_

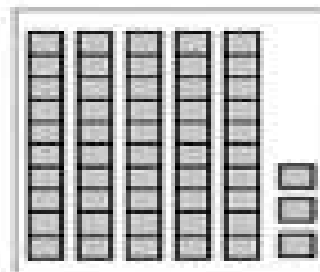
Grade-II

Date: \_\_\_\_\_

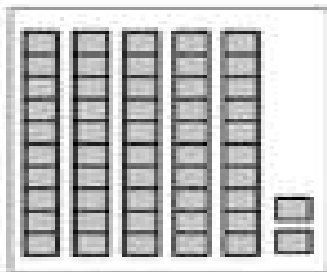
## I. Write the tens and ones.



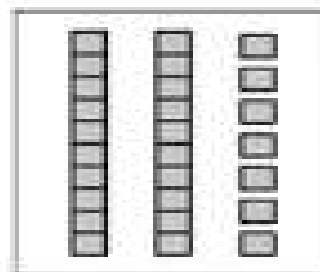
Tens	Ones
Number	



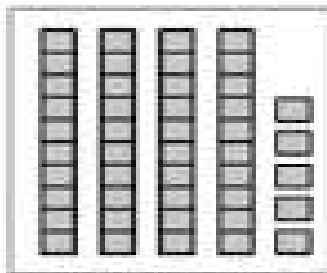
Tens	Ones
Number	



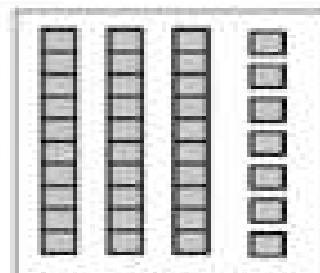
Tens	Ones
Number	



Tens	Ones
Number	



Tens	Ones
Number	



Tens	Ones
Number	

## II .Arrange the numbers in descending order .

1. 249, 471, 593, 624, 881 = \_\_\_\_\_ , \_\_\_\_\_ , \_\_\_\_\_ , \_\_\_\_\_ , \_\_\_\_\_






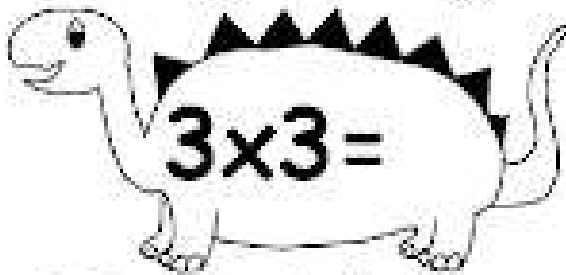
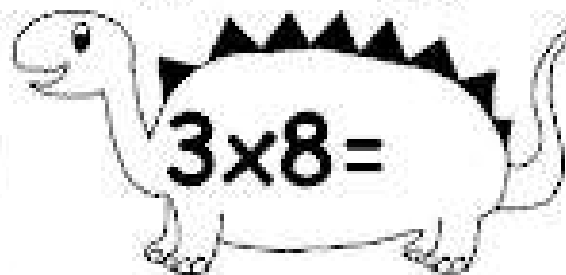
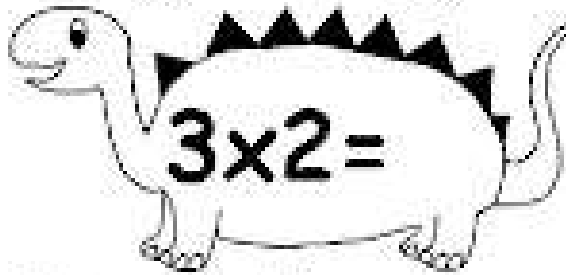
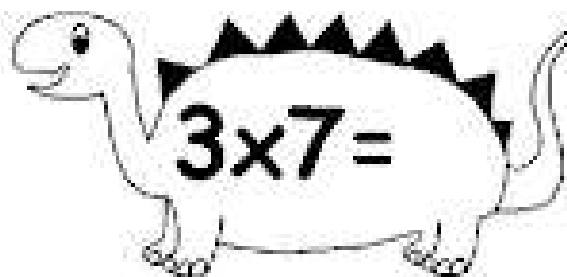
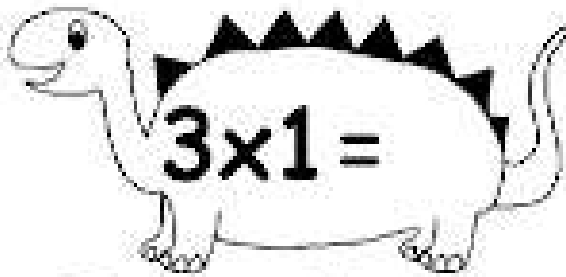
2. 329, 703, 462, 330 , 994 = \_\_\_\_\_ , \_\_\_\_\_ , \_\_\_\_\_ , \_\_\_\_\_ , \_\_\_\_\_

3. 537,226, 502, 293, 373 = \_\_\_\_\_ , \_\_\_\_\_ , \_\_\_\_\_ , \_\_\_\_\_ , \_\_\_\_\_

4. 482, 497, 248,428,284 = \_\_\_\_\_ , \_\_\_\_\_ , \_\_\_\_\_ , \_\_\_\_\_ , \_\_\_\_\_

5. 841, 812, 863,836, 814= \_\_\_\_\_ , \_\_\_\_\_ , \_\_\_\_\_ , \_\_\_\_\_ , \_\_\_\_\_

III. Complete the following .



#### IV. Fill in the blanks.

a. 4 hundreds + 8 ones + 5 ones = \_\_\_\_\_

b. 8 ones + 6 Tens = \_\_\_\_\_

c. 1 Hundreds + 6 tens + 3 ones = \_\_\_\_\_

d. 2 ones + 4 tens + 3 hundred = \_\_\_\_\_

e. 2 tens + 4 ones + 1 hundred = \_\_\_\_\_

f. 6 ones + 4 hundred = \_\_\_\_\_

g. 6 hundreds + 9 ones + 5 tens = \_\_\_\_\_

h. 3 tens + 7 hundreds = \_\_\_\_\_