

## BASIC WORKSHEET- 4

Grade - I

Name \_\_\_\_\_

Sub: Mathematics

Date : \_\_\_\_\_

**I. Match the following.**

- |                             |                             |
|-----------------------------|-----------------------------|
| a) 10 tens                  | 90 + 9                      |
| b) 5 tens + 4 ones          | the smallest 3-digit number |
| c) Largest 2-digit number   | 54                          |
| d) Smallest 2- digit number | 60 + 9                      |
| e) 1 more than 9            | 0                           |
| f) 10 less than 10          | ten                         |
| g) 6 tens + 9 ones          | 10                          |

**II. Fill in the blanks.**

- |                                  |                                   |
|----------------------------------|-----------------------------------|
| 1. $14 + 1 = \underline{\quad}$  | 6. $99 + \underline{\quad} = 100$ |
| 2. $49 + \underline{\quad} = 50$ | 7. $69 + \underline{\quad} = 70$  |
| 3. $39 + \underline{\quad} = 39$ | 8. $50 + \underline{\quad} = 59$  |
| 4. $79 + 1 = \underline{\quad}$  | 9. $\underline{\quad} + 0 = 90$   |
| 5. $77 + 1 = \underline{\quad}$  | 10. $24 + 36 = \underline{\quad}$ |



**III. Solve the sums.**

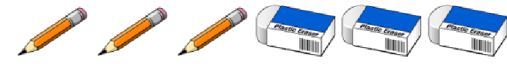
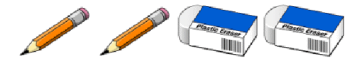
= Tens





= Ones

Add the following with the help of the key given above. One has been done for you.


 + 
 
 = 
   
**43** + **32** = **75**

1.  +  =



2.  +  =

3.  +  =

4.  +  =



5.  +  =

6.  +  =

7.  +  =

8.  +  =

9.  +  =

10.  +  =