

Mathematics Answer Key

Grade: 2

Date:22/04/2020

I. Write number names of the following.

1. 90= NINETY

2. 110= ONE HUNDRED AND TEN

3. 146= ONE HUNDRED AND FORTY SIX

4. 200= TWO HUNDRED

5. 408= FOUR HUNDRED AND EIGHT

II. Fill the circle by counting forward.

100	101	102	103	104	105	106	107	108	109
591	592	593	594	595	596	597	598	599	600
711	712	713	714	715	716	717	718	719	720

III. Write the numbers and number name .

1) 6 tens and 3 ones = Sixty three

2) 8 tens and 2 ones = Eighty two

3) 5 tens and 9 ones = Fifty nine

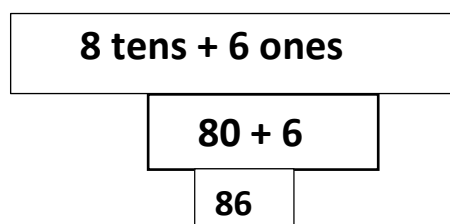
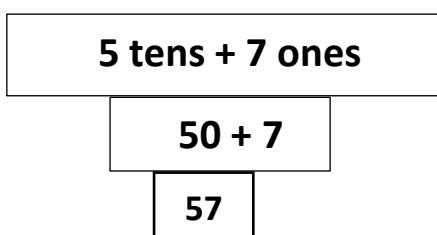
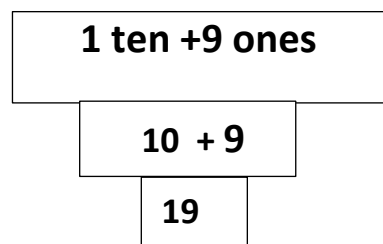
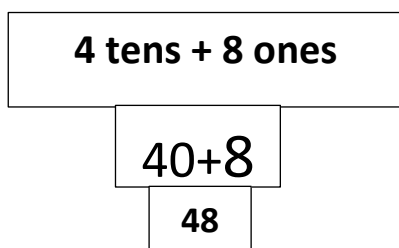
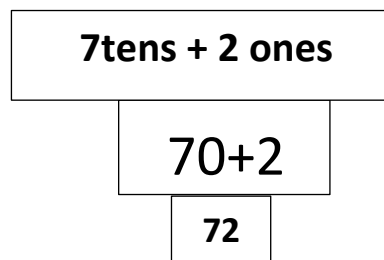
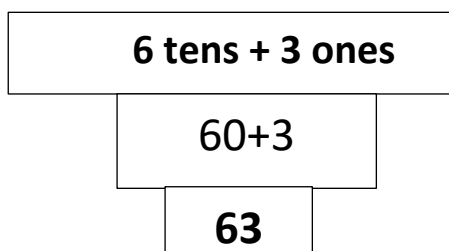
4) 9 tens and 0 ones = Ninety

5) 7 tens and 6 ones = Seventy Six

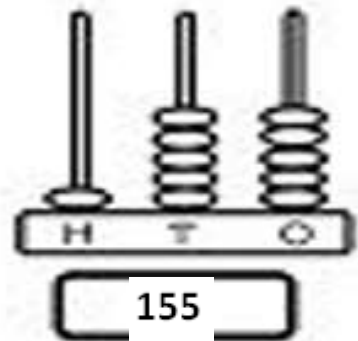
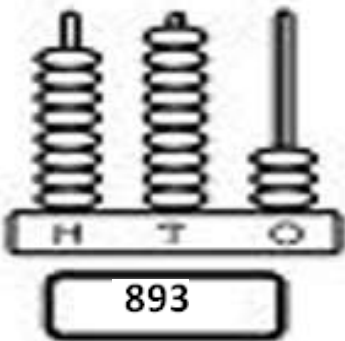
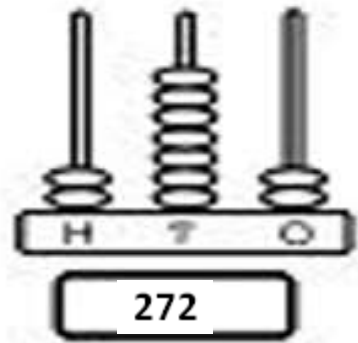
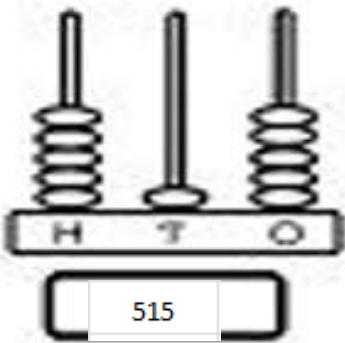
IV. Fill the number of tens and ones.

1	48=	<u>4</u>	tens	<u>8</u>	ones
2	36=	<u>3</u>	tens	<u>6</u>	ones
3	61=	<u>6</u>	tens	<u>1</u>	ones
4	89=	<u>8</u>	tens	<u>9</u>	ones
5	90=	<u>9</u>	tens	<u>0</u>	ones
6	14=	<u>1</u>	tens	<u>4</u>	ones
7	43=	<u>4</u>	tens	<u>3</u>	ones
8	55=	<u>5</u>	tens	<u>5</u>	ones
9	67=	<u>6</u>	tens	<u>7</u>	ones
10	17=	<u>1</u>	tens	<u>7</u>	ones

V. Count the number of TENS and ONES, then write out the value of the numbers and add them up.



VI . Count the beads and write the number shown on each of the given abacus.



VII. Write the numbers from 751 to 800.

751	752	753	754	755	756	757	758	759	760
761	762	763	764	765	766	767	768	769	770
771	772	773	774	775	776	777	778	779	780
781	782	783	784	785	786	787	788	789	790
791	792	793	794	795	796	797	798	799	800