

Name of the student : _____ Grade:II Date: Maths

I. Write Number names of the following

a) 97= _____

b) 35= _____

c) 49= _____

d) 28= _____

e) 63= _____

II. Fill the circles by counting Backward.

a) (70) ○ ○ ○ (66) ○ ○ ○ ○ ○

b) ○ ○ ○ (37) ○ ○ (34) ○ ○ ○

c) (100) ○ ○ ○ (96) ○ ○ ○ ○ ○

III . What comes before and after the number .

a). _____ 67 _____

b). _____ 85 _____

c). _____ 99 _____

d). _____ 54 _____

e). _____ 80 _____

f). _____ 33 _____

IV .what comes in between the given numbers.

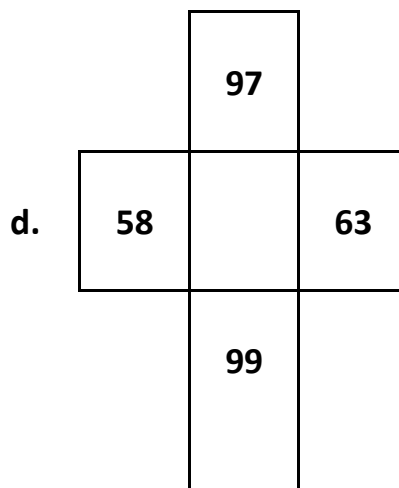
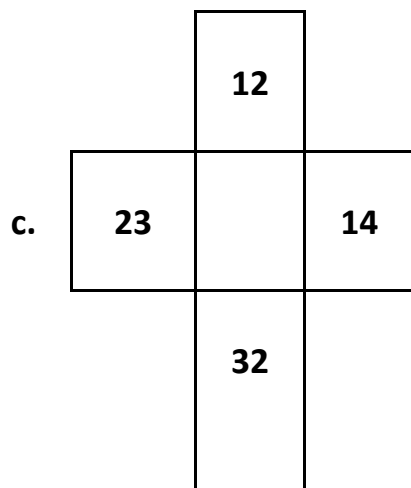
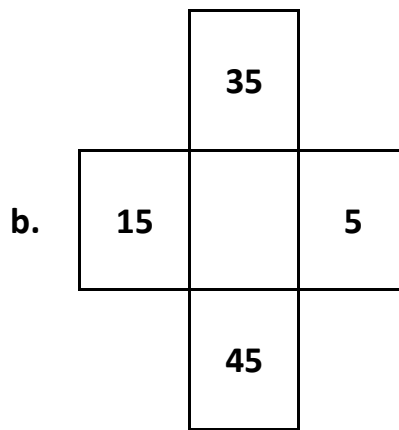
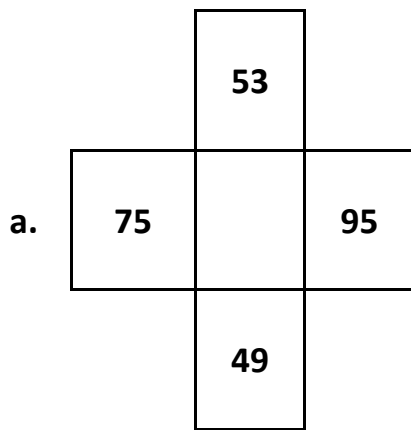
a) 42 _____ 44

b) 89 _____ 91

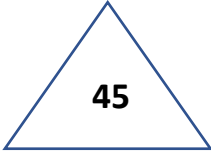
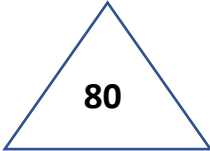
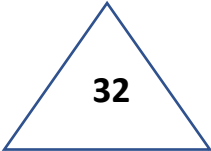
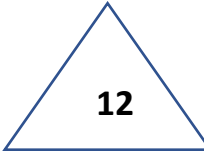
c) 77 _____ 79

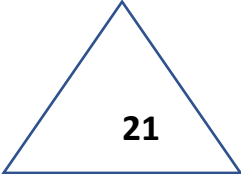
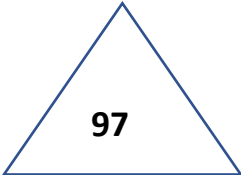
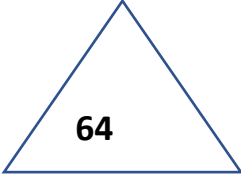
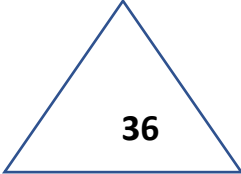
d) 41 _____ 43

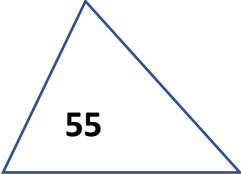
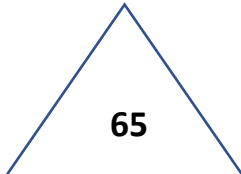
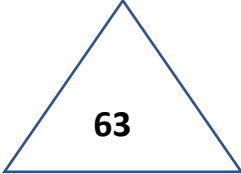
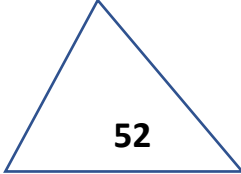
V. Circle the smallest number and write in the center .

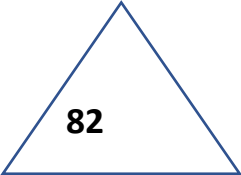
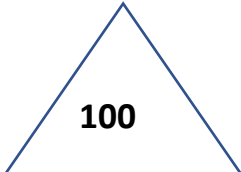
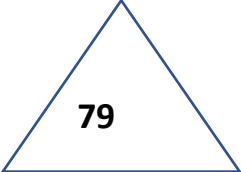
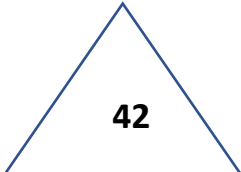


VI. Circle the greatest number.

a.    

b.    

c.    

d.    

VII. Write numbers from 610 to 650.

610			
			650