

Name: _____

Grade: III

Branch: _____

Date: 01/05/20

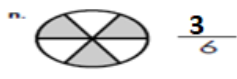
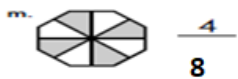
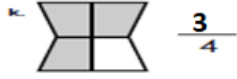
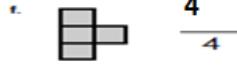
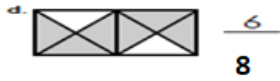
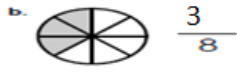
Subject: Mathematics Key

Topic: Fractions

I. Identify the numerator and denominator of the following fractions:

Fractions	Numerator	Denominator
$\frac{3}{8}$	3	8
$\frac{4}{7}$	4	7
$\frac{5}{9}$	5	9
$\frac{3}{5}$	3	5

II. Write the missing number (Numerator or Denominator):



III. Colour the parts of the shape to represent each fraction:

